

Name _____

American Indians Picture Analysis

Directions: Look at the picture, analyze what you see, guess which of the American Indians groups the people in the picture belong to. Once you have made your decision give two reasons to support your answer.


Picture One



American Indian Group:

Two Reasons to support your analysis:

Picture Two



American Indian Group:

Two Reasons to support your analysis:


Picture Three



American Indian Group:

Two Reasons to support your analysis:


Picture # 4



American Indian Group:

Two Reasons to support your analysis:

Picture # 5



American Indian Group:

Two Reasons to support your analysis:
